


Name: _____

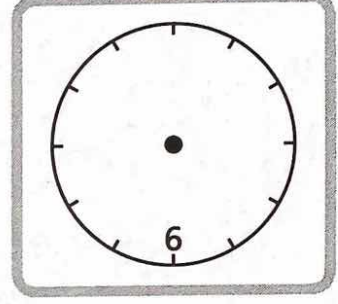
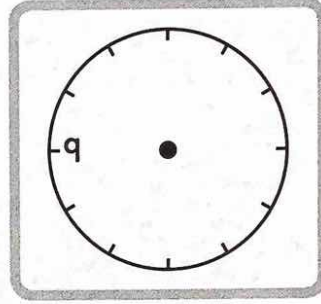
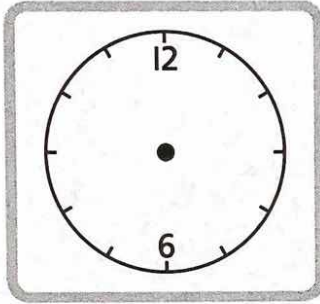

Gr. 2 Math June 8-12

Clock Faces

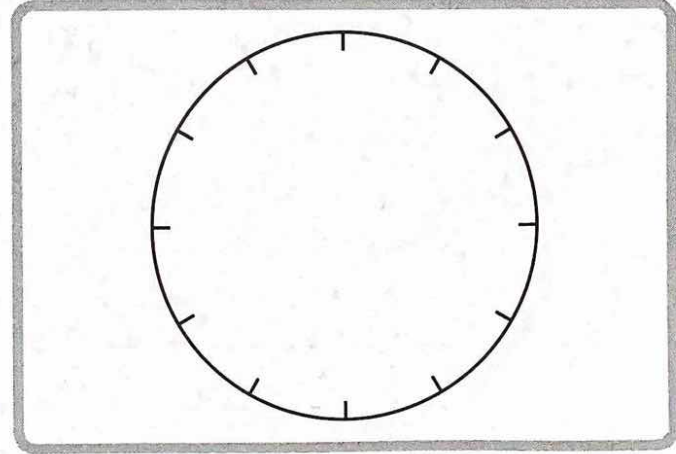
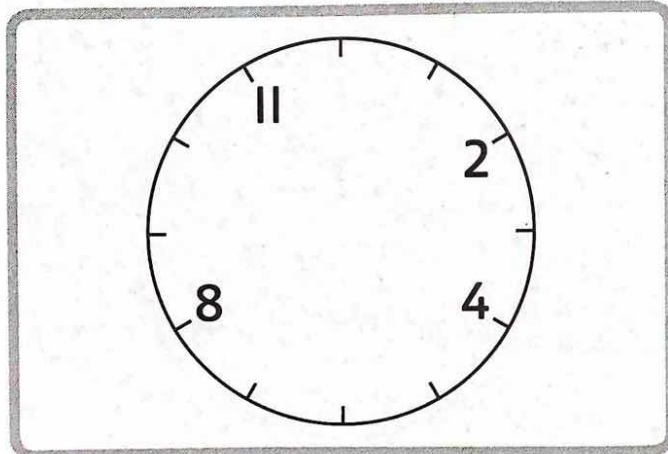

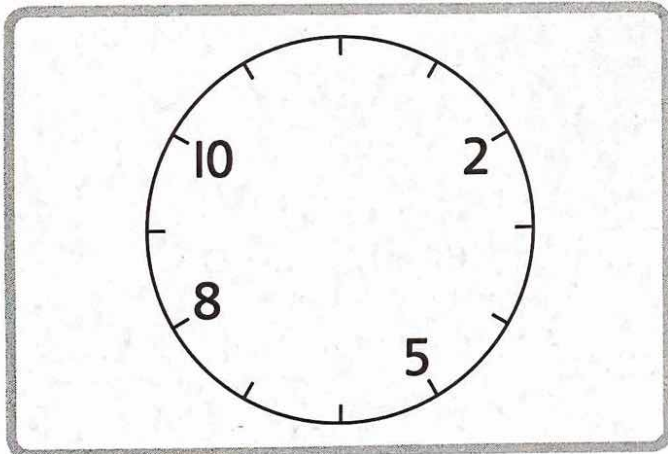


This is a clock face.
Numbers start at 1 and end at 12.


Fill in the missing 3, 6, 9, and 12.



Fill in the missing numbers. Start with 3, 6, 9, and 12.











Time to the Hour




The **hour hand** is short and thick.

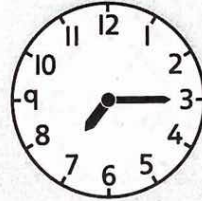
Circle the hour hand.



When the minute hand points at 12, we say "o'clock."





o'clock

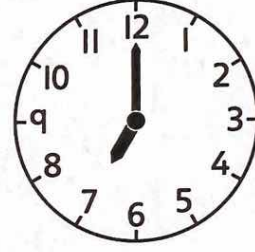


not o'clock

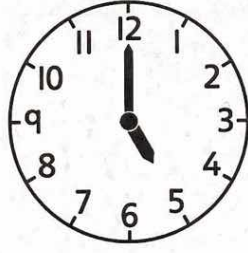
Is it o'clock? Write **yes** or **no**.

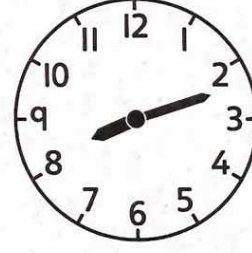




















A **digital clock** shows the time with numbers only.

When the digital clock shows :00 minutes, we say “**o’clock**.”




hours:minutes

Is it o'clock? Write **yes** or **no**.




yes



no











It is **9 o'clock** or **9:00**.

Write the time another way.

1:00

1 o'clock

8:00


10:00

11 o'clock

11:00

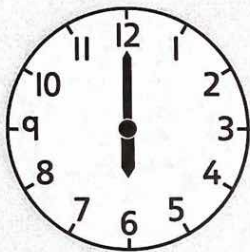
7 o'clock

6 o'clock




It is **9 o'clock** or **9:00**.

Write the time in two ways.




 6 o'clock
 6 :00




 o'clock
 :00




 o'clock
 :00



: _____



: _____



: _____

Use a toy clock to show these times.

Circle the two that are the same.

7:00

3 o'clock

5:00

1:00

6 o'clock

1 o'clock

Time to the Half Hour

How many minutes after 10:00?

15 minutes

_____ minutes
after 10:00

_____ minutes
after 10:00

_____ minutes
after 10:00


Write the time.

15 minutes
after 7:00
is 7 : 15


_____ minutes
after _____
is _____ : _____

_____ minutes
after _____
is _____ : _____

It is half an hour after 8:00 or 30 minutes after 8:00.




half past 8

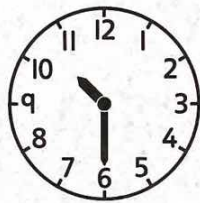


8:30

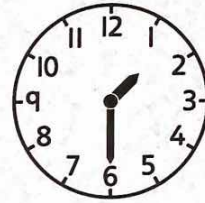
Write the time in two ways.




half past _____
_____ :30



half past _____
_____ :30



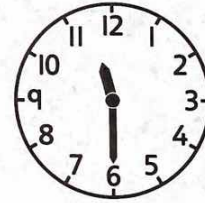
half past _____
_____ :30



_____ : _____



_____ : _____



_____ : _____

Use a toy clock to show these times.

Circle the two that are the same.

12:30

half past 2


4:30

5:30


half past 9

half past 12






Write the time.



half past 2



4 o'clock



Days and Months

- Write the days of the week in order.
- Circle the days you go to school.

Friday	1. <u> Sunday </u>
Thursday	2. <u> </u>
Monday	3. <u> </u>
Saturday	4. <u> </u>
Wednesday	5. <u> </u>
Sunday	6. <u> </u>
Tuesday	7. <u> </u>

- Unscramble the days.

ridFya	<u> F </u> <u> r </u> <u> i </u> <u> d </u> <u> a </u> <u> y </u>
noMyad	<u> M </u> <u> </u> <u> </u> <u> d </u> <u> a </u> <u> y </u>
Sduany	<u> </u> <u> </u> <u> </u> <u> d </u> <u> a </u> <u> y </u>
Tduaey	<u> </u> <u> </u> <u> </u> <u> </u> <u> </u> <u> </u>
rsudhaTy	<u> </u> <u> </u> <u> </u> <u> </u> <u> </u> <u> </u>
Syataurd	<u> </u> <u> </u> <u> </u> <u> </u> <u> </u> <u> </u>
aWdedsney	<u> </u> <u> </u> <u> </u> <u> </u> <u> </u> <u> </u>

- Write the months of the year in order.
- Circle the months you go to school.

May	1. <u>January</u>
July	2. _____
December	3. _____
January	4. _____
March	5. _____
November	6. _____
September	7. _____
June	8. _____
February	9. _____
October	10. _____
August	11. _____
April	12. _____

- Unscramble the months.

yaM	_____
eJun	_____
lyJu	_____

Bonus: ybrFeuar _____

Calendars

Use this calendar to answer the questions.

January 2018						
Sunday	Monday	Tuesday	Wednesday	Thursday	Friday	Saturday
	1	2	3	4	5	6
7	8	9	10	11	12	13
14	15	16	17	18	19	20
21	22	23	24	25	26	27
28	29	30	31			

What day of the week is it?

January 1st Monday

January 16th _____

January 25th _____

What date is each day?

the first Wednesday January 3rd

the third Saturday _____

the second Monday _____

Use this calendar to answer the questions.

June 2018						
Sunday	Monday	Tuesday	Wednesday	Thursday	Friday	Saturday
		Today ↓			1	2
3	4	5	6	7	8	9
10	11	12	13	14	15	16
17	18	19	20	21	22	23
24	25	26	27	28	29	30

Today is T _____ day, Ju _____ 5th, _____ 18

What **day** of the week was it yesterday? _____

What **date** will it be tomorrow? _____

Sara has a play date on June 15th.

How many **days** until her play date? _____

Is it more than 1 week, 1 week, or less than 1 week until Sara's play date? _____

A class trip was exactly 1 month ago.

What **date** was the trip? _____