

May 11-15

Gr. 2




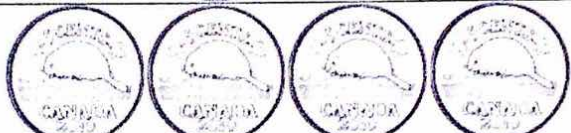

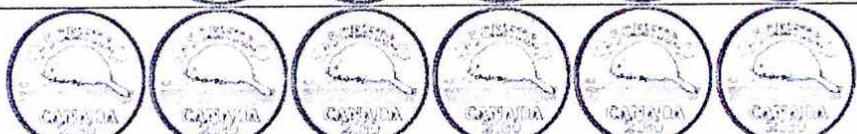

Name

Date



# COUNTING NICKELS SHEET 1

Count the nickels. Work out the amounts in cents.

		= ___ ¢
		= ___ ¢
		= ___ ¢
		= ___ ¢
		= ___ ¢
		= ___ ¢
		= ___ ¢

Fill in the correct amounts

\_\_\_ nickels makes 15¢

\_\_\_ nickels makes 10¢

\_\_\_ nickels makes 30¢

\_\_\_ nickels makes 20¢

\_\_\_ nickels makes 25¢

\_\_\_ nickels makes 40¢











Name \_\_\_\_\_

Date \_\_\_\_\_



# COUNTING DIMES SHEET 1

Count the dimes. Work out the amounts in cents.

	= <u>    </u> ¢
	= <u>    </u> ¢
	= <u>    </u> ¢
	= <u>    </u> ¢
	= <u>    </u> ¢
	= <u>    </u> ¢
	= <u>    </u> ¢
	= <u>    </u> ¢

Fill in the correct amounts

\_\_\_\_\_ dimes makes 20¢

\_\_\_\_\_ dimes makes 50¢

\_\_\_\_\_ dimes makes 40¢

\_\_\_\_\_ dimes makes 30¢

\_\_\_\_\_ dimes makes 70¢

\_\_\_\_\_ dimes makes 60¢



Free Math Sheets, Math Games and Math Help

[MATH-SALAMANDERS.COM](http://MATH-SALAMANDERS.COM)



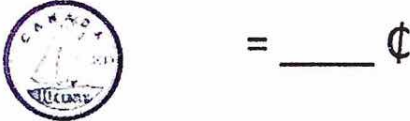
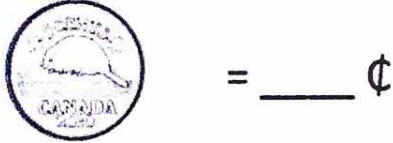
Name \_\_\_\_\_

Date \_\_\_\_\_



# COUNTING NICKELS AND DIMES SHEET 1

Count the nickels and dimes. Work out the amounts in cents.




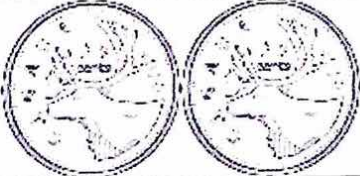

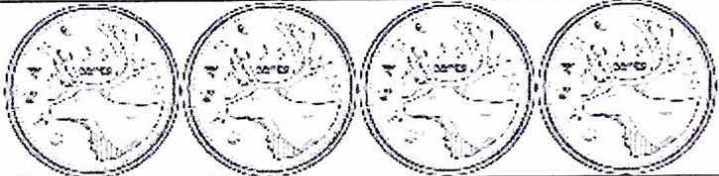

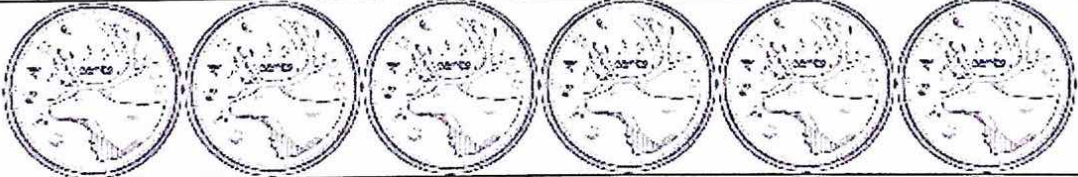

Name

Date



# COUNTING QUARTERS SHEET 1

Count the quarters. Work out the amounts in dollars and cents.

	= <u>    </u> ¢
	= <u>    </u> ¢
	= <u>    </u> ¢
	= \$ <u>    </u>
	= \$ <u>    </u>
	= \$ <u>    </u>
	= \$ <u>    </u>

Fill in the correct amounts

     quarters make 50¢

     quarters make \$1

     quarters make \$1.25

     quarters make 75¢



Name: \_\_\_\_\_

# The Snack Shack Menu

Cookie ..... 30¢

Pretzel ..... 25¢

Cupcake ..... 10¢

Pudding Cup ... 35¢

Brownie ..... 20¢

Banana ..... 15¢

1. A \_\_\_\_\_ costs



2. A \_\_\_\_\_ costs



3. A \_\_\_\_\_ costs




4. A \_\_\_\_\_ costs



5. A \_\_\_\_\_ costs



6. A \_\_\_\_\_ costs



Name \_\_\_\_\_

Date \_\_\_\_\_



# COUNTING COINS TO \$1 SHEET 2

Count the coins. Work out the amounts in cents.

	_____ ¢
	_____ ¢
	_____ ¢
	_____ ¢
	_____ ¢
	_____ ¢
	_____ ¢
	_____ ¢
	_____ ¢
	_____ ¢









Name \_\_\_\_\_

Date \_\_\_\_\_



# COUNTING LOONIES SHEET 1

Count the loonies. Work out the amounts in dollars.

	= \$ _____
	= \$ _____
	= \$ _____
	= \$ _____
	= \$ _____
	= \$ _____

Fill in the correct amounts

\_\_\_\_\_ loonies makes \$5

\_\_\_\_\_ loonies makes \$2

\_\_\_\_\_ loonies makes \$4

\_\_\_\_\_ loonies makes \$6

\_\_\_\_\_ loonies makes \$3

\_\_\_\_\_ loonies makes \$8









Name \_\_\_\_\_

Date \_\_\_\_\_



## COUNTING TOONIES SHEET 2

Count the toonies. Work out the amounts in dollars.

	= \$ ____
	= \$ ____
	= \$ ____
	= \$ ____
	= \$ ____
	= \$ ____

Fill in the correct amounts

\_\_\_\_\_ toonies makes \$8

\_\_\_\_\_ toonies makes \$4

\_\_\_\_\_ toonies makes \$10

\_\_\_\_\_ toonies makes \$12



Free Math Sheets, Math Games and Math Help

**MATH-SALAMANDERS.COM**












Name \_\_\_\_\_

Date \_\_\_\_\_



# COUNTING LOONIES AND TOONIES SHEET 1

Count the loonies and toonies. Work out the amounts in dollars.

	= \$ ____
	= \$ ____
	= \$ ____
	= \$ ____
	= \$ ____
	= \$ ____
	= \$ ____


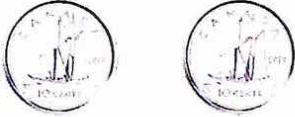






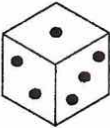
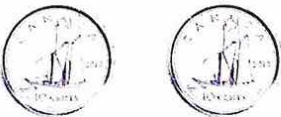
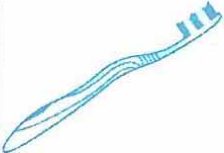





Name : \_\_\_\_\_

# Making Change

Sheet 1

Count the coins and write the change for each purchase.

1)	 15¢		_____ ¢
2)	 35¢		_____ ¢
3)	 65¢		_____ ¢
4)	 40¢		_____ ¢
5)	 15¢		_____ ¢
6)	 45¢		_____ ¢
7)	 20¢		_____ ¢

