

Name _____


Date _____




COUNTING NICKELS AND DIMES SHEET 1

Count the nickels and dimes. Work out the amounts in cents.



 = _____ ¢

 = _____ ¢

 = _____ ¢

 = _____ ¢

 = _____ ¢

 = _____ ¢

 = _____ ¢

 = _____ ¢



Name

Date



COUNTING QUARTERS SHEET 2

Count the quarters. Work out the amounts in dollars and cents.

	= ___ ¢
	= ___ ¢
	= \$ ___
	= ___ ¢
	= \$ ___
	= \$ ___
	= \$ ___

Fill in the correct amounts

___ quarters makes \$1

___ quarters makes 75¢

___ quarters makes \$1.50

___ quarters makes \$1.25



Name: _____

The Snack Shack Menu

Cookie 30¢

Pretzel 25¢

Cupcake 10¢

Pudding Cup ... 35¢

Brownie 20¢

Banana 15¢

1. A _____ costs




2. A _____ costs




3. A _____ costs



4. A _____ costs



5. A _____ costs



6. A _____ costs



Name _____

Date _____



COUNTING COINS TO \$1 SHEET 2

Count the coins. Work out the amounts in cents.

	_____ ¢
	_____ ¢
	_____ ¢
	_____ ¢
	_____ ¢
	_____ ¢
	_____ ¢
	_____ ¢
	_____ ¢









Name _____

Date _____



COUNTING LOONIES SHEET 1

Count the loonies. Work out the amounts in dollars.

		= \$ _____
		= \$ _____
		= \$ _____
		= \$ _____
		= \$ _____
		= \$ _____

Fill in the correct amounts

_____ loonies makes \$5

_____ loonies makes \$2

_____ loonies makes \$4

_____ loonies makes \$6

_____ loonies makes \$3

_____ loonies makes \$8



Free Math Sheets, Math Games and Math Help

MATH-SALAMANDERS.COM









Name _____

Date _____



COUNTING TOONIES SHEET 2

Count the toonies. Work out the amounts in dollars.

	= \$ ____
	= \$ ____
	= \$ ____
	= \$ ____
	= \$ ____
	= \$ ____

Fill in the correct amounts

_____ toonies makes \$8

_____ toonies makes \$4

_____ toonies makes \$10

_____ toonies makes \$12



Free Math Sheets, Math Games and Math Help

MATH-SALAMANDERS.COM










Name _____

Date _____



COUNTING LOONIES AND TOONIES SHEET 1

Count the loonies and toonies. Work out the amounts in dollars.

		= \$ ____
		= \$ ____
		= \$ ____
		= \$ ____
		= \$ ____
		= \$ ____
		= \$ ____



Name _____

Date _____




COUNTING COINS TO \$5 SHEET 1


Count the coins. Work out the amounts in dollars.



\$ _____



\$ _____



\$ _____




\$ _____



\$ _____



\$ _____



\$ _____



Counting Canadian Coins (A)

What is the value of each set of coins?

1.



\$ _____

2.



\$ _____

3.



\$ _____

4.



\$ _____

5.



\$ _____

6.



\$ _____

Name: _____

Counting Money

Canadian Currency

Canadian banknotes, or bills, are worth \$5.00, \$10.00, or \$20.00.



\$5.00 dollars



\$10.00 dollars



\$20.00 dollars

Count the currency and write the amounts.




\$ _____



\$ _____



\$ _____



\$ _____



\$ _____






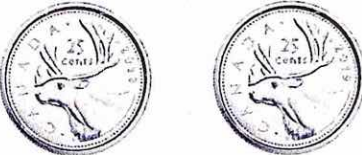


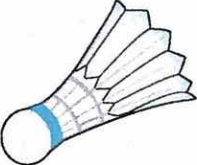


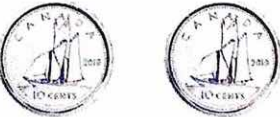
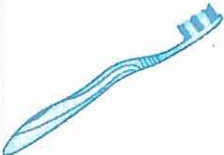



\$ _____

Name : _____

Making Change

Sheet 1

Count the coins and write the change for each purchase.

1)	 15¢		_____ ¢
2)	 35¢		_____ ¢
3)	 65¢		_____ ¢
4)	 40¢		_____ ¢
5)	 15¢		_____ ¢
6)	 45¢		_____ ¢
7)	 20¢		_____ ¢



Name _____

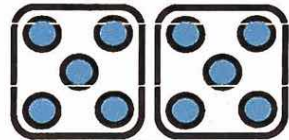
Date _____

Review





5 TIMES TABLE - GROUPS OF 5


Change these groups of 5s into 5 times table facts.


 = $2 \times 5 = 10$


 = $4 \times 5 = \underline{\quad}$


 = $\underline{\quad} \times \underline{\quad} = \underline{\quad}$


 = $\underline{\quad} \times \underline{\quad} = \underline{\quad}$

 = $\underline{\quad} \times \underline{\quad} = \underline{\quad}$

 = $\underline{\quad} \times \underline{\quad} = \underline{\quad}$

 = $\underline{\quad} \times \underline{\quad} = \underline{\quad}$

 = $\underline{\quad} \times \underline{\quad} = \underline{\quad}$

 = $\underline{\quad} \times \underline{\quad} = \underline{\quad}$



Name

Date

Review



5 TIMES TABLE - SALAMANDER SHEET 1

Write in the answers to each fact in Sally the Shape Salamander's ball.

 5×3	 5×5	 5×4
 5×2	 5×8	 5×6
 5×10	 5×9	 5×7

Newton the Number Newt says "Shade all the even answers yellow.
What do you notice?"

